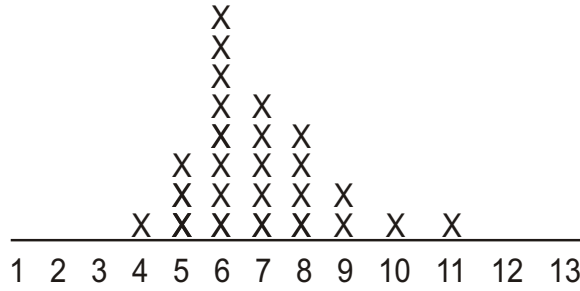


Graphs, Charts and Plots... Oh My!

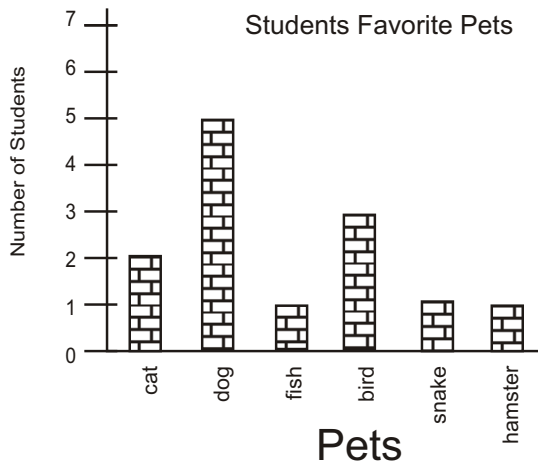
Directions: Answer all of the questions asked about each chart or graph below.

Letters In Student's First Name



- 1) Is this a line plot or a bar graph? 2) Is the information numerical or categorical? Explain why.

- 3) What is the range of the data? (range of name lengths) 4) How many people are in the sample group?

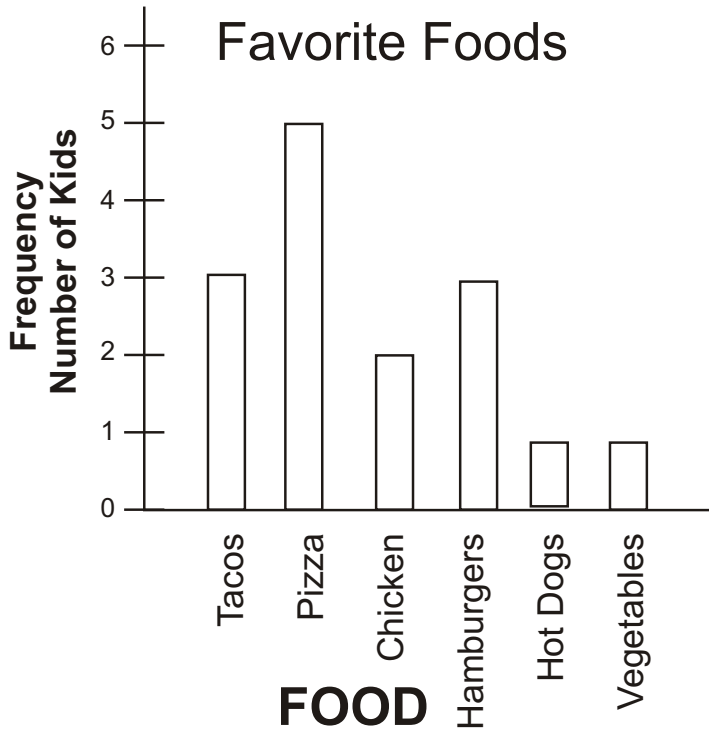


- 1) Is this a line plot or a bar graph?

- 2) Is the information numerical or categorical? Explain why.

- 3) What pet is most people's favorite?

- 4) How large is the sample group?



1) Is this a line plot or a bar graph?


2) Is the information numerical or categorical?
Explain why.

3) What two types of foods did people like the least?

4) How many people are in the sample group.

Favorite Foods

x = one person



1) Is this a line plot or a bar graph?

2) Is the information numerical or categorical?
Explain why.

3) What type of food is the mode?

4) How many people are in the sample group?

